



Up-to-date Questions and Answers from authentic resources to improve knowledge and pass the exam at very first attempt. ----- Guaranteed.



GRE-Quantitative Dumps
GRE-Quantitative Braindumps
GRE-Quantitative Real Questions
GRE-Quantitative Practice Test
GRE-Quantitative Actual Questions



Admission-Tests

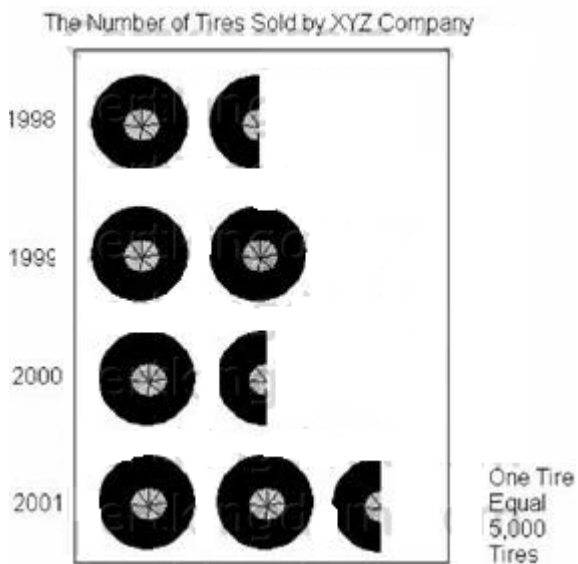
GRE-Quantitative

Graduate Record Examination (Quantitative)



QUESTION: No: 402

Which two years were the least number of tires sold?




- A. 1998 and 1999
- B. 1998 and 2000
- C. 1998 and 2001
- D. 1999 and 2000
- E. 2000 and 2001

Answer: B

QUESTION: No: 403

Which of the following is a correct graph of $x > 1$, $x < 4$?



- A. Line A
- B. Line B
- C. Line C
- D. Line D
- E. Line E

Answer: A

QUESTION: No: 404

How much money did Jessica's budget allow for housing in April of 2001?



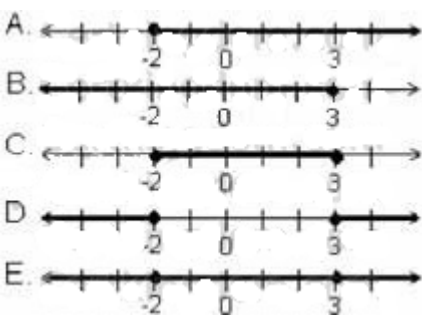
Jessica's Monthly Earnings from January 2001 to June 2001

January	\$2578
February	\$2432
March	\$2688
April	\$2480
May	\$2622
June	\$2555

- A. \$617.80
- B. \$620.92
- C. \$622.50
- D. \$626.38
- E. \$633.20

Answer: C

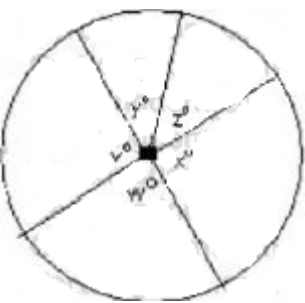
QUESTION: No: 405
Which of the following is the correct graph for $x \geq 3$ and $x \leq -2$



- A. Line A
- B. Line B
- C. Line C
- D. Line D
- E. Line E

Answer: D

QUESTION: No: 406
Column A -The average (arithmetic mean) of $v, w, y, x,$ and z



- A. if the quantity in Column A is greater
- B. if the quantity in Column B is greater
- C. if the two quantities are equal
- D. if it is impossible to determine which quantity is greater

Answer: A

QUESTION: No: 407
The shaded are in the below figure is 65% of the are of the entire circle, what is the value of d ?

Column A - d
Column B - 126 degrees

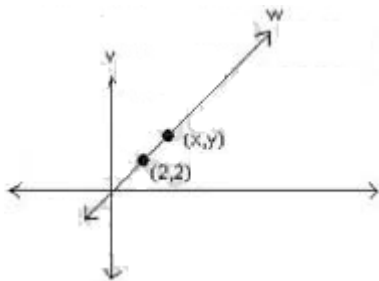


- A. if the quantity in Column A is greater
- B. if the quantity in Column B is greater
- C. if the two quantities are equal
- D. if it is impossible to determine which quantity is greater

Answer: C

QUESTION: No: 408

Column A - $(x-y)$
Column B - 0

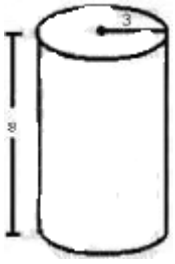


- A. if the quantity in Column A is greater
- B. if the quantity in Column B is greater
- C. if the two quantities are equal
- D. if it is impossible to determine which quantity is greater

Answer: C

QUESTION: No: 409

What is the volume of the following cylinder?

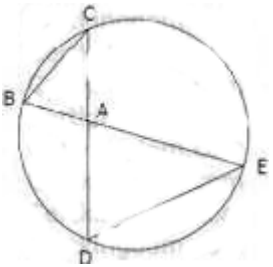


- A. 210.91
- B. 226.20
- C. 75.36
- D. 904.32
- E. 28.26

Answer: B

QUESTION: No: 410

In the above circle $AB = 4$, $BC = 6$, $AC = 5$ and $AD = 6$. What is the length of DE ?



- A. 6
- B. 7.5
- c. 8
- D. 9
- E. 10

Answer: D

QUESTION: No: 411

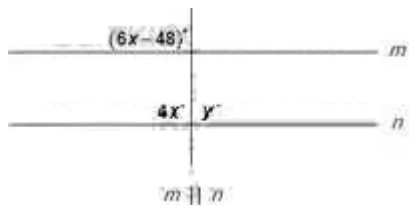
In the above circle, the radius is 6 and $AB = 6$. What is the area of the shaded region?

- A. $2\pi - 3\sqrt{3}$
- B. $4\pi - 4\sqrt{3}$
- C. $4\pi - 9\sqrt{3}$
- D. $6\pi - 6\sqrt{3}$
- E. $6\pi - 9\sqrt{3}$

- A. Option A
- B. Option B
- C. Option C
- D. Option D
- E. Option E

Answer: E

QUESTION: No: 412

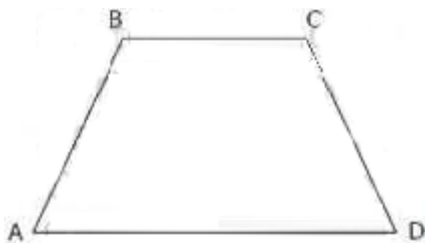


- A. 72
- B. 90
- C. 108
- D. 120
- E. 180

Answer: C

QUESTION: No: 413

What is the area of the trapezoid above if $AB = BC = CD = 6$, and $AD = 12$?



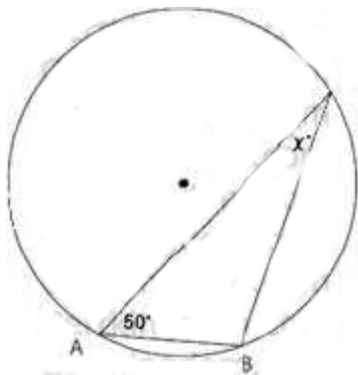
- A. $9\sqrt{2}$
- B. $9\sqrt{3}$
- C. $6\sqrt{6}$
- D. $18\sqrt{2}$
- E. $18\sqrt{3}$

- A. Option A
- B. Option B
- C. Option C
- D. Option D

Answer: B

QUESTION: No: 414

If the radius of the circle above is equal to the chord AB, then what is the value of?



- A. 25
- B. 30
- C. 40
- D. 45
- E. 50

Answer: B



SAMPLE QUESTIONS

*These questions are for demo purpose only. **Full version** is up to date and contains actual questions and answers.*

Killexams.com is an online platform that offers a wide range of services related to certification exam preparation. The platform provides actual questions, exam dumps, and practice tests to help individuals prepare for various certification exams with confidence. Here are some key features and services offered by Killexams.com:

Actual Exam Questions: *Killexams.com provides actual exam questions that are experienced in test centers. These questions are updated regularly to ensure they are up-to-date and relevant to the latest exam syllabus. By studying these actual questions, candidates can familiarize themselves with the content and format of the real exam.*

Exam Dumps: *Killexams.com offers exam dumps in PDF format. These dumps contain a comprehensive collection of questions and answers that cover the exam topics. By using these dumps, candidates can enhance their knowledge and improve their chances of success in the certification exam.*

Practice Tests: *Killexams.com provides practice tests through their desktop VCE exam simulator and online test engine. These practice tests simulate the real exam environment and help candidates assess their readiness for the actual exam. The practice tests cover a wide range of questions and enable candidates to identify their strengths and weaknesses.*

Guaranteed Success: *Killexams.com offers a success guarantee with their exam dumps. They claim that by using their materials, candidates will pass their exams on the first attempt or they will refund the purchase price. This guarantee provides assurance and confidence to individuals preparing for certification exams.*

Updated Content: *Killexams.com regularly updates its question bank and exam dumps to ensure that they are current and reflect the latest changes in the exam syllabus. This helps candidates stay up-to-date with the exam content and increases their chances of success.*

Technical Support: *Killexams.com provides free 24x7 technical support to assist candidates with any queries or issues they may encounter while using their services. Their certified experts are available to provide guidance and help candidates throughout their exam preparation journey.*

For More exams visit <https://killexams.com/vendors-exam-list>
Kill your exam at First Attempt....Guaranteed!